

















Continue the pattern.

50	60				
25	35				
42	52				

Add

$15 + 5 = \square$	$12 + 6 = \square$	$11 + 7 = \square$
$17 + 2 = \square$	$14 + 2 = \square$	$16 + 4 = \square$
$13 + 5 = \square$	$19 + 1 = \square$	$18 + 2 = \square$

How much?

			
= <input type="text"/> p	= <input type="text"/> p	= <input type="text"/> p	= <input type="text"/> p

Colour the hexagons.

